

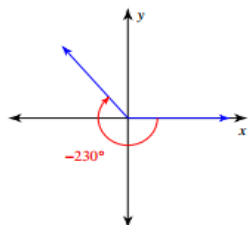
Name: _____

Date: _____

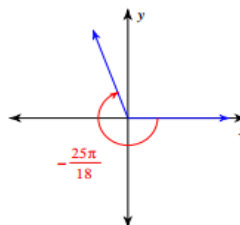
Complete the following questions showing work for all calculations.

Find the reference angle.

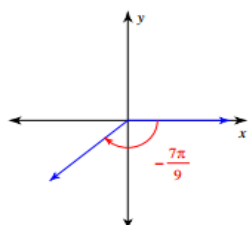
1)



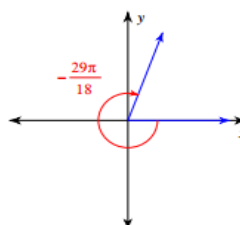
2)



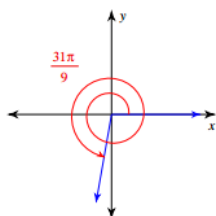
3)



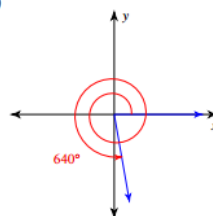
4)



5)



6)



7) -510°

8) $-\frac{19\pi}{18}$

9) $-\frac{13\pi}{12}$

10) -250°

State if the given angles are coterminal.

11) 185° , -545°

12) $\frac{17\pi}{36}$, $\frac{161\pi}{36}$

Find a coterminal angle between 0° and 360° .

13) -330°

14) -435°

15) 640°

16) -442°

Find a coterminal angle between 0 and 2π for each given angle.

17) $\frac{11\pi}{3}$

18) $-\frac{35\pi}{18}$

19) $\frac{15\pi}{4}$

20) $-\frac{19\pi}{12}$

Find a positive and a negative coterminal angle for each given angle.

21) $\frac{5\pi}{4}$

22) $\frac{25\pi}{36}$