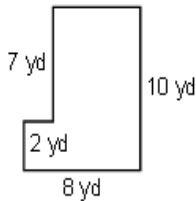

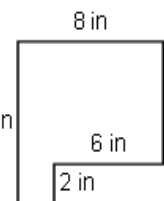


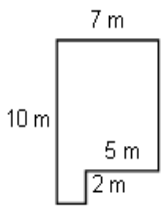
AREA AND PERIMETER ASSIGNMENT

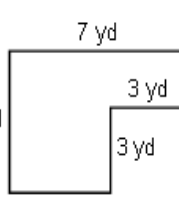
Calculate the area and perimeter of each shape.


(1) 
Perimeter: _____
Area: _____

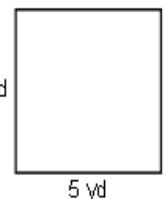
(5) 
Perimeter: _____
Area: _____

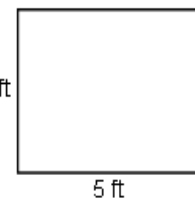
(9) 
Perimeter: _____
Area: _____


(2) 
Perimeter: _____
Area: _____

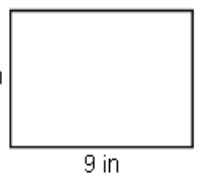
(6) 
Perimeter: _____
Area: _____


(10) 
Perimeter: _____
Area: _____

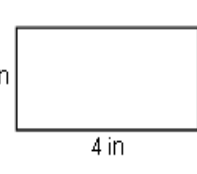
(3) 
Perimeter: _____
Area: _____

(7) 
Perimeter: _____
Area: _____

(11) 
Perimeter: _____
Area: _____

(4) 
Perimeter: _____
Area: _____

(8) 
Perimeter: _____
Area: _____

(12) 
Perimeter: _____
Area: _____